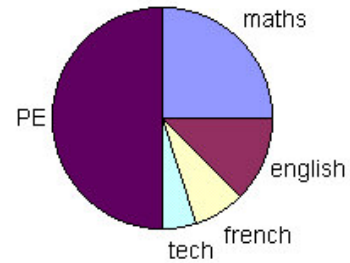


Interpreting Pie Charts

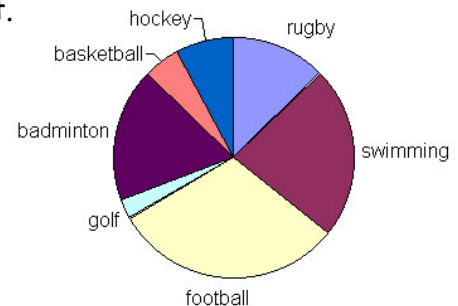
1. This pie chart shows 40 students' favourite subjects at college.

- How many like PE?
- How many like Maths?
- How many like English?
- What fraction of students like PE?



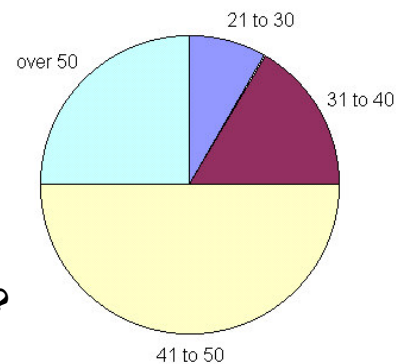
2. This pie chart shows 100 people's favourite sport.

- Which is the most popular sport?
- Which is the least popular?
- List the sports in order of popularity.
- What fraction of people like swimming?
- About how many people like swimming?



3. This chart gives the age of 120 teachers at a Somerset school.

- What is the most common age range?
- How many teachers are 41 to 50?
- How many teachers are over 50?
- How many teachers are between 21 and 40?
- What percentage of teachers are 41 to 50?
- What percentage are aged over 50?
- Approximately how many teachers are 21 to 30?



4. This chart shows what 80 14 year olds like to do in the evenings.

What can you say about the students?

